

## Challenge

What is the missing number?

247,903	
---------	--

is one thousand more than

## Challenge

What digits could go in each box to make the sum correct?

4		+		=	5	3
---	--	---	--	---	---	---

## Challenge

The numbers in this sequence decrease by the same amount each time.  
What are the next two numbers in the sequence?

54,386	53,385	52,384		
--------	--------	--------	--	--

## Challenge

Using  $<$ ,  $>$  or  $=$ , compare these calculations.

$(56 + 45) - 25$		$(25 + 89) - 23$
$7 \times (9 + 12)$		$(8 \times 4) + 100$

## Challenge

What is the missing number?

247,903	
---------	--

is one thousand less than

## Challenge

What is the missing number?

	247.853
--	---------

is five hundredths more than

## Challenge






Write the four missing digits to make this addition calculation correct.

		7	0	5		8
+	2		3		0	9
	9	2	3	6	2	7

## Challenge

What is the mean cost of the books?

Book 1	Book 2	Book 3
£2.80	£2.16	£2.54



**Chance**

Treat: + 10 points

**Chance**

Trick: - 10 points

**Chance**

Treat: + 5 points

**Chance**

Trick: - 6 points

**Chance**

Treat: + 7 points

**Chance**

Trick: - 8 points

**Chance**

Treat: + 4 points

**Chance**

Trick: - 9 points

**Chance**

Treat: + 9 points

**Chance**

Treat: + 10 points